

Name: _____

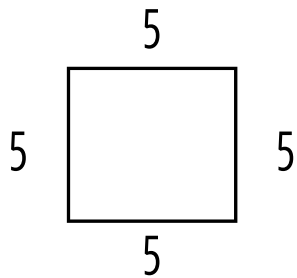
CONTENT CHECK

Find the area and perimeter of the shapes below. Show your work.

Perimeter= side + side+ side+ side

Area= length x width

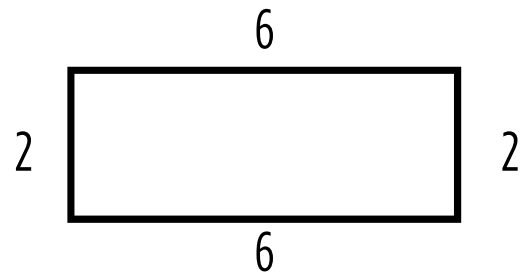
#1



Perimeter:

Area:

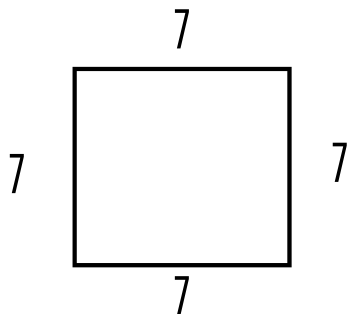
#2



Perimeter:

Area:

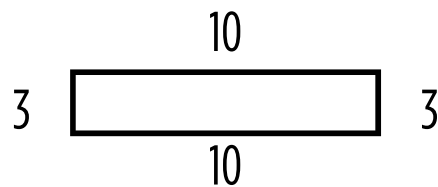
#3



Perimeter:

Area:

#4



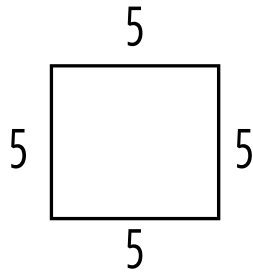
Perimeter:

Area:

Name: _____

CONTENT CHECK-ANSWER SHEET

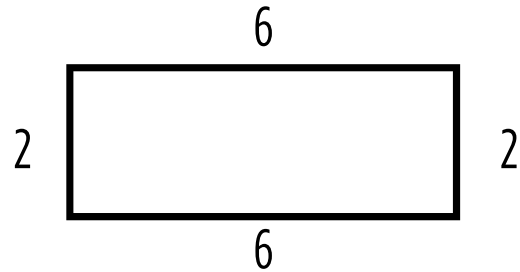
#1



Perimeter: 20

Area: 25

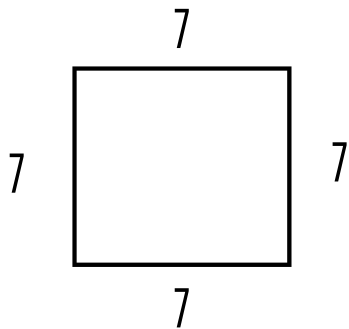
#2



Perimeter: 16

Area: 12

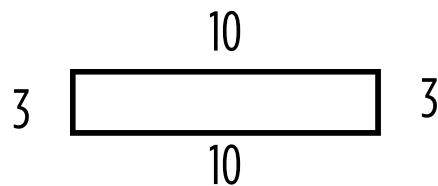
#3



Perimeter: 28

Area: 49

#4



Perimeter: 26

Area: 30